

Lesson 2: Graphs of proportional relationships

Goals

- Compare graphs that represent the same proportional relationship using differently scaled axes.
- Create graphs representing the same proportional relationship using differently scaled axes, and identify which graph to use to answer specific questions.

Learning Targets

- I can graph a proportional relationship from an equation.
- I can tell when two graphs are of the same proportional relationship even if the scales are different.

Lesson Narrative

The purpose of this lesson is for students to understand that there are many successful ways to set up and scale axes in order to graph a proportional relationship. Sometimes, however, we choose specific ranges for the axes in order to see specific information.

In the first activity, students sort graphs on cards based on what proportional relationship they represent. Each graph has a different scale, and some scales are purposefully quite different so students cannot use “looks like” as a way to tell the difference between the relationships. This activity presses the need for paying attention to scale and relying on mathematical definitions of steepness and not just visual ones.

In the second activity, students graph a proportional relationship representing water filling a tank on two differently scaled axes. Then they compare their graph to a graph of a non-proportional relationship and answer questions about the situation. By looking at the same two relationships graphed at different scales, students see how much effect the scale of the axes has on the information we can figure out.

Building On

- Recognise and represent proportional relationships between quantities.

Addressing

- Understand the connections between proportional relationships, lines, and linear equations.
 - Graph proportional relationships, interpreting the unit rate as the slope of the graph. Compare two different proportional relationships represented in different ways. For example, compare a distance-time graph to a distance-time equation to determine which of two moving objects has greater speed.
-

Building Towards

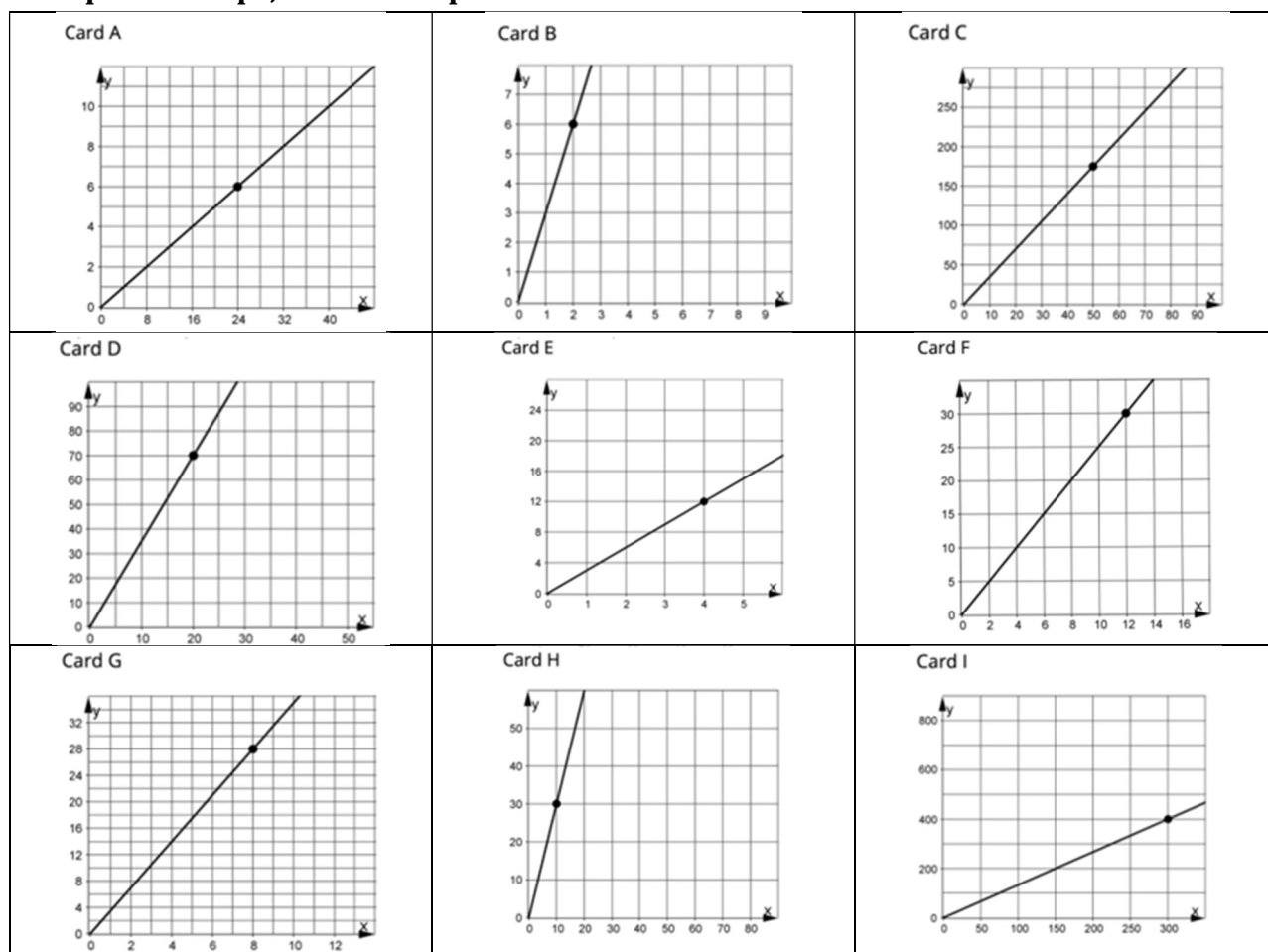
- Graph proportional relationships, interpreting the unit rate as the slope of the graph. Compare two different proportional relationships represented in different ways. For example, compare a distance-time graph to a distance-time equation to determine which of two moving objects has greater speed.

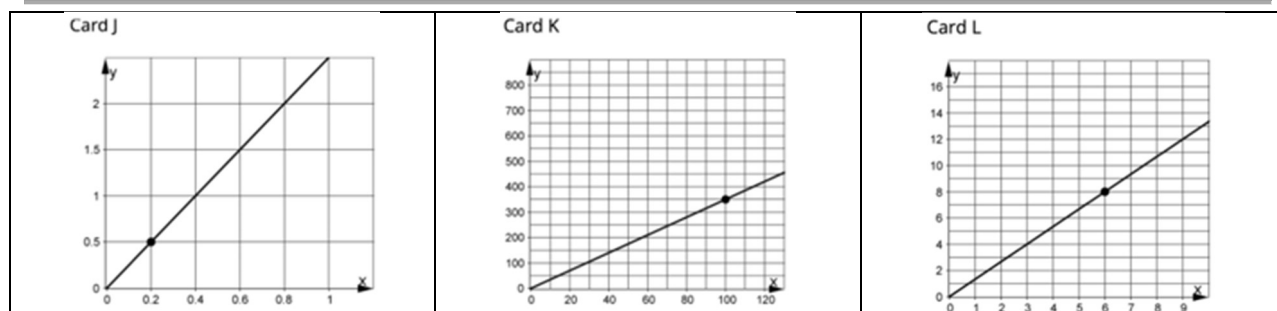
Instructional Routines

- Three Reads
- Discussion Supports
- Take Turns

Required Materials

Pre-printed slips, cut from copies of the blackline master





Straightedges

A rigid edge that can be used for drawing line segments. Sometimes a ruler is okay to use as a straightedge, but sometimes it is preferable to use an unruled straightedge, like a blank index card.

Required Preparation

For Card Sort: Proportional Relationships, prepare 1 copy of the blackline master for every 2 students and cut them up ahead of time. Provide access to straightedges.

Student Learning Goals

Let's think about scale.

2.1 An Unknown Situation

Warm Up: 5 minutes

In the previous warm-up, students compared different proportional relationships on two sets of axes that were scaled the same. In this warm-up, students will work with two sets of axes scaled differently and the same proportional relationship. The purpose of this warm-up is to make explicit that the same proportional relationship can appear to have different steepness depending on the axes, which is why paying attention to scale is important when making sense of graphs or making graphs from scratch. Students learned how to graph and write equations for proportional relationships in previous years, so this warm-up also helps refresh those skills.

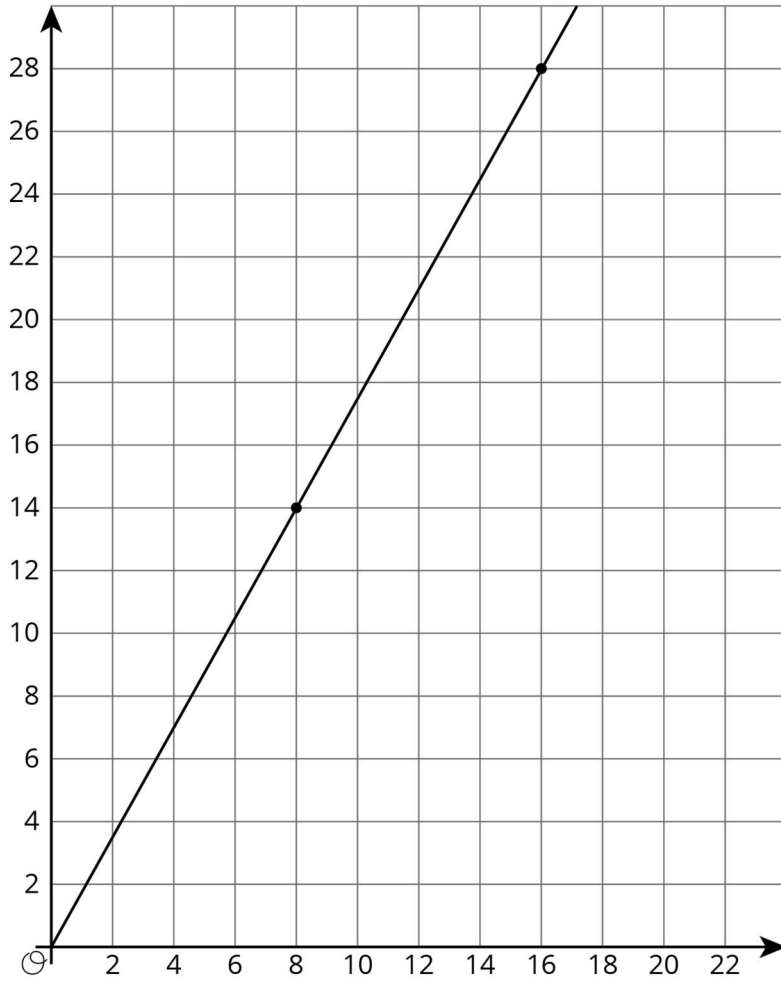
Identify students using different strategies to graph the relationship on the new axes. For example, since this is a proportional relationship, some students may scale up the point $(8,14)$ to something like $(40,70)$ and then plot that point before drawing a line through it and the point $(0,0)$. Other students may use the equation they wrote and one of the x -values marked on the new axes to find a point on the line and draw in the line from there.

Launch

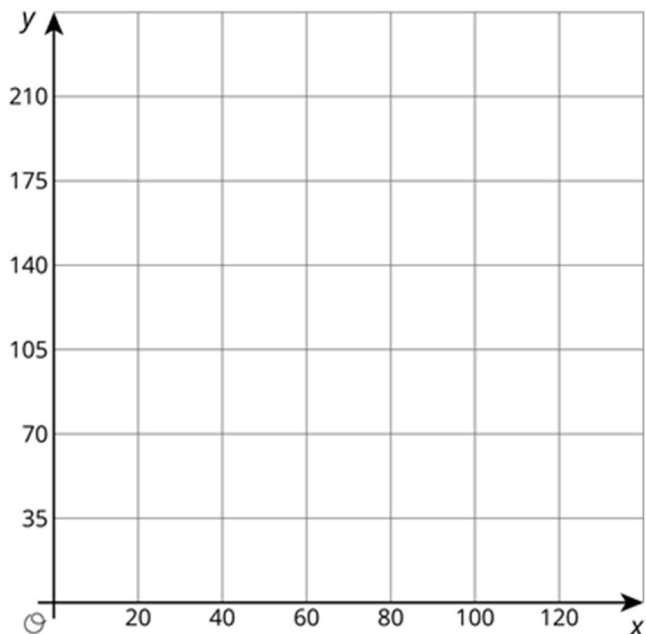
Give 2–3 minutes of quiet work time followed by a whole-class discussion.

Student Task Statement

Here is a graph that could represent a variety of different situations.

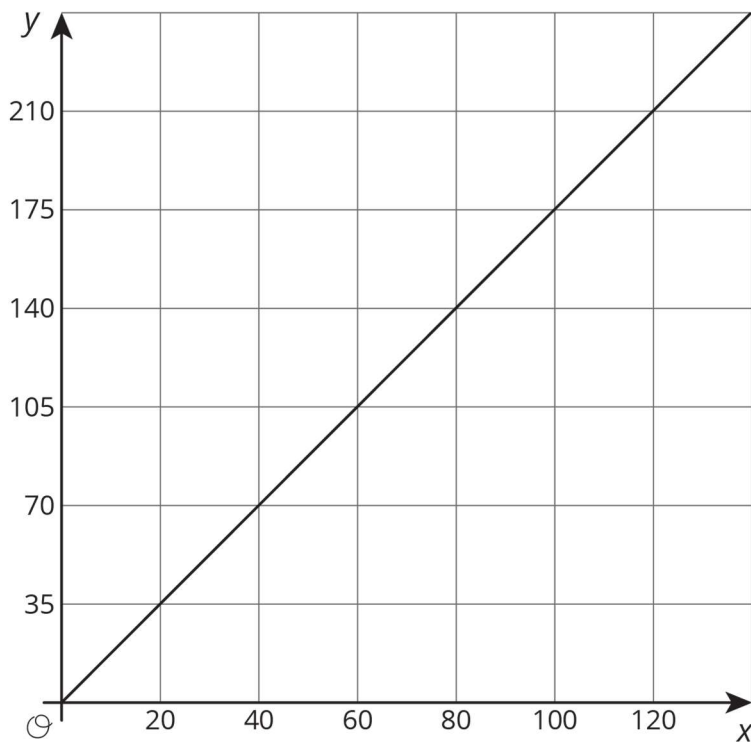


1. Write an equation for the graph.
2. Sketch a new graph of this relationship.



Student Response

1. Equation: $y = 1\frac{3}{4}x$ or $y = 1.75x$ or $y = \frac{7}{4}x$ or equivalent.



- 2.

Activity Synthesis

Display the two images from the activity for all to see. Invite previously identified students to share how they graphed the relationship on the new line.

Ask students, “Which graph looks steeper to you?” Students may see the first line as steeper, even though the two lines have the same slope. It is important students understand that this is one of the reasons mathematics uses numbers (slope) to talk about the steepness of lines and not “looks like.”

2.2 Card Sort: Proportional Relationships

15 minutes

The purpose of this activity is for students to identify the same proportional relationship graphed using different scales. Students will first sort the cards based on what proportional relationship they represent and then write an equation representing each relationship. Identify and select groups using different strategies to match graphs to share during the Activity Synthesis. For example, some groups may identify the unit rate for each graph in order to match while others may choose to write equations first and use those to match their graphs.

Instructional Routines

- Discussion Supports
- Take Turns

Launch

Arrange students in groups of 4. Provide each group with two sets of 12 pre-cut slips.

Speaking: Discussion Supports. To support students to produce statements about proportional relationships, provide sentence frames for students to use when they describe the reasoning for their matches. For example, “___ and ___ match/don’t match, because ___.” Encourage use of relevant vocabulary such as “constant of proportionality” and “unit rate.”

Design Principle(s): Support sense-making; Optimise output (for explanation)

Anticipated Misconceptions

If students have trouble recalling the meaning of the *constant of proportionality*, remind them that one way to think about it is “the change in y for every unit change in x .”

Student Task Statement

Your teacher will give you 12 graphs of proportional relationships.

1. Sort the graphs into groups based on what proportional relationship they represent.
2. Write an equation for each *different* proportional relationship you find.

Student Response

Card sort and possible matching equation:

A: $y = 0.25x$

B, E, H: $y = 3x$

C, D, G, K: $y = 3.5x$

I, L: $y = \frac{4}{3}x$

F, J: $y = \frac{5}{2}x$

Activity Synthesis

As a result of this conversation, students should understand that the scale of the axes a graph is drawn on can hide the actual relationship between the two variables if you just look at the steepness of the line without paying attention to the numbers on the axes.

Ask previously selected groups to share their strategies for matching the graphs. Highlight uses of relevant vocabulary such as “constant of proportionality” or “unit rate.”

Have students look at Card A. Ask students, “Do you think this graph looks like $y = \frac{1}{4}x$? Why or why not?” Possible reasons from students are:

- No, I think this graph looks like $y = x$.
- I would expect $y = \frac{1}{4}x$ to be less steep since an increase in x means $\frac{1}{4}$ as much of an increase in y .
- Since the x -scale is four times the y -scale, the line looks steeper than I expected.

Give students a moment to identify another card that they think does not “look like” the equation and select a few students to share the graph they chose and explain their thinking.

Engagement: Develop Effort and Persistence. Break the class into small discussion groups and then invite a representative from each group to report back to the whole class.

Supports accessibility for: Language; Social-emotional skills; Attention

2.3 Different Scales

15 minutes

Building off the work in the previous activity, students now graph a proportional relationship on two differently scaled axes and compare the proportional relationship to an already-graphed non-proportional relationship on the same axes. Students are asked to make sense of the intersections of the two graphs by reasoning about the situation and consider which scale is most helpful: the zoomed in, or the zoomed out. In this case, which graph is most helpful depends on the questions asked about the situation.

Instructional Routines

- Three Reads
-

Launch

Arrange students in groups of 2. Provide access to straightedges.

Reading, Writing: Math Language Routine: Three Reads. During the first read, students focus on comprehending the situation; during the second read, students identify quantities; during the third read, the final prompt is revealed and students brainstorm possible strategies to answer the question. The intended question is withheld until the third read so students can make sense of the whole context before rushing to a solution. The purpose of this routine is to support students' reading comprehension as they make sense of mathematical situations and information through conversation with a partner.

Design Principle(s): Support sense-making

How It Happens:

1. Use this routine to support reading comprehension of this word problem without solving it for students. In the first read, students read the problem with the goal of comprehending the situation.

Invite a student to read the problem aloud while everyone else reads with them, and then ask, "What is this situation about?" Be sure to display the two graphs or ask students to reference them while reading. Allow one minute to discuss with a partner and then share with the whole class. A typical response may be: "Two large water tanks are filling with water. One of them is filling at a constant rate, while the other is not. Both graphs represent Tank A. Tank B only has an equation."

2. In the second read, students analyse the mathematical structure of the story by naming quantities.

Invite students to read the problem aloud with their partner, or select a different student to read to the class, and then prompt students by asking: "What can be counted or measured in this situation?" Give students one minute of quiet think time, followed by another minute to share with their partner. A typical written response may be: "litres of water in Tank A; litres of water in Tank B; amount of time that has passed in minutes; constant rate of $\frac{1}{2}$ litres per minute."

3. In the third read, students brainstorm possible strategies to answer the questions.

Invite students to read the problem aloud with their partner, or select a different student to read to the class, and follow with the questions. Instruct students to think of ways to approach the questions without actually solving the problems.

Consider using these questions to prompt students: "How would you approach this question?", "What strategy or method would you try first?", and "Can you think of a different way to solve it?".

Give students one minute of quiet think time followed by another minute to discuss with their partner. Provide these sentence frames as partners discuss: "To draw a

graph for Tank B, I would....”, “One way to approach the question about finding the time when the tanks have the same amount of water would be to....”, and “I would use the first/second graph to find....”.

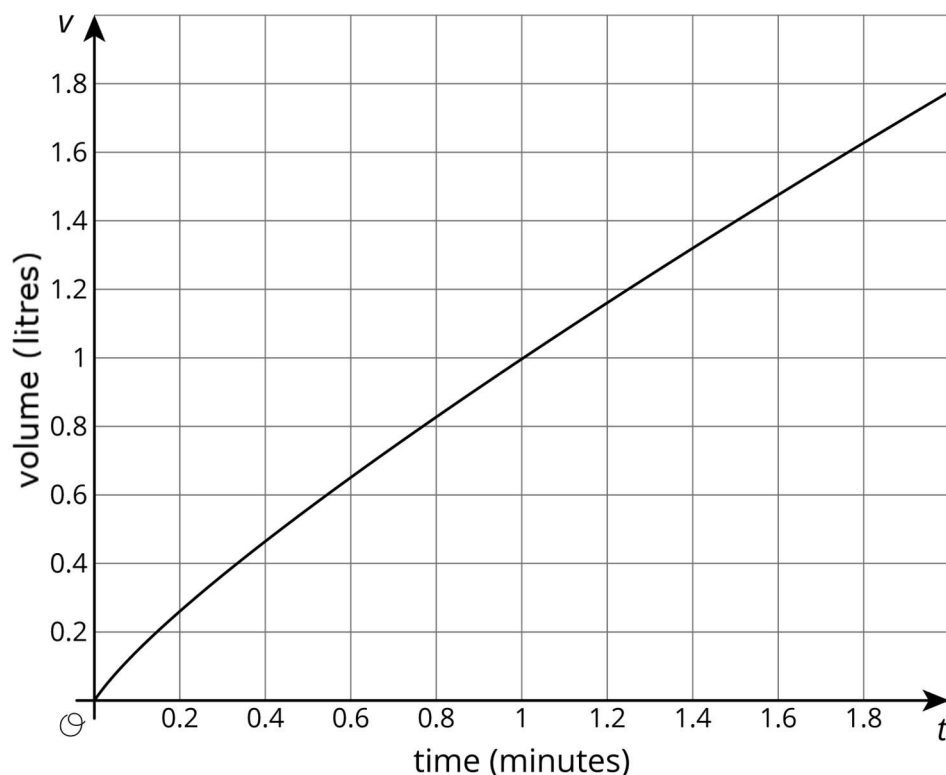
- As partners are discussing their solution strategies, select 1–2 students for each question to share their ideas with the whole class. As students are presenting their strategies to the whole class, create a display that summarises the ideas for each question.

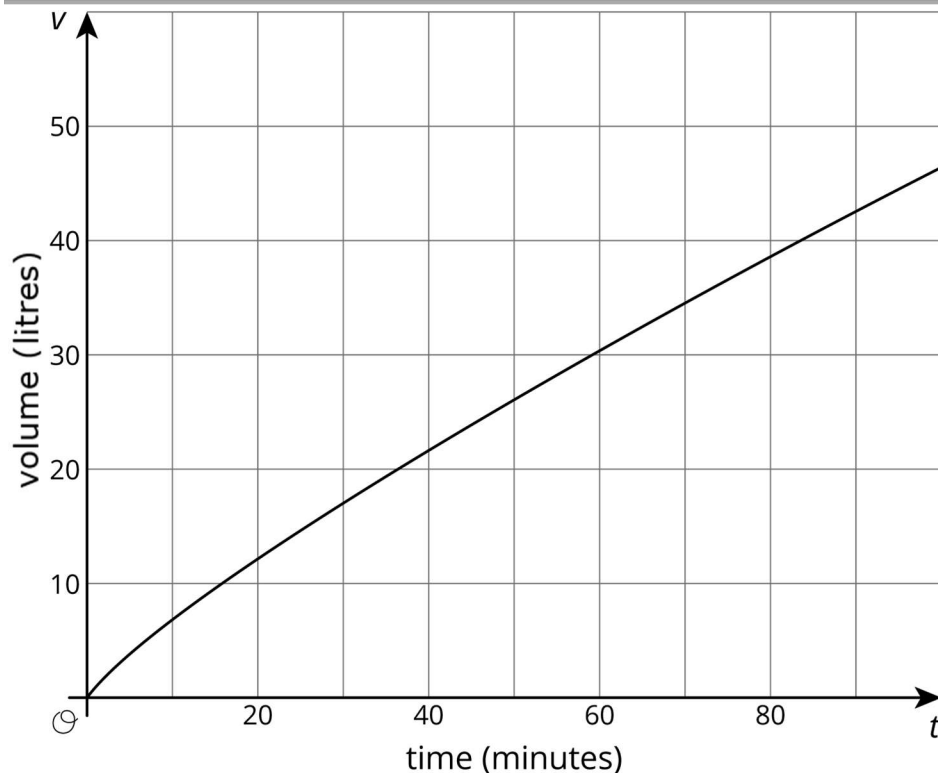
Listen for quantities that were mentioned during the second read, and take note of approaches in which the students distinguish between the graphs with differently-scaled axes.

- Post the summary where all students can use it as a reference.

Student Task Statement

Two large water tanks are filling with water. Tank A is not filled at a constant rate, and the relationship between its volume of water and time is graphed on each set of axes. Tank B is filled at a constant rate of $\frac{1}{2}$ litres per minute. The relationship between its volume of water and time can be described by the equation $v = \frac{1}{2}t$, where t is the time in minutes and v is the total volume in litres of water in the tank.

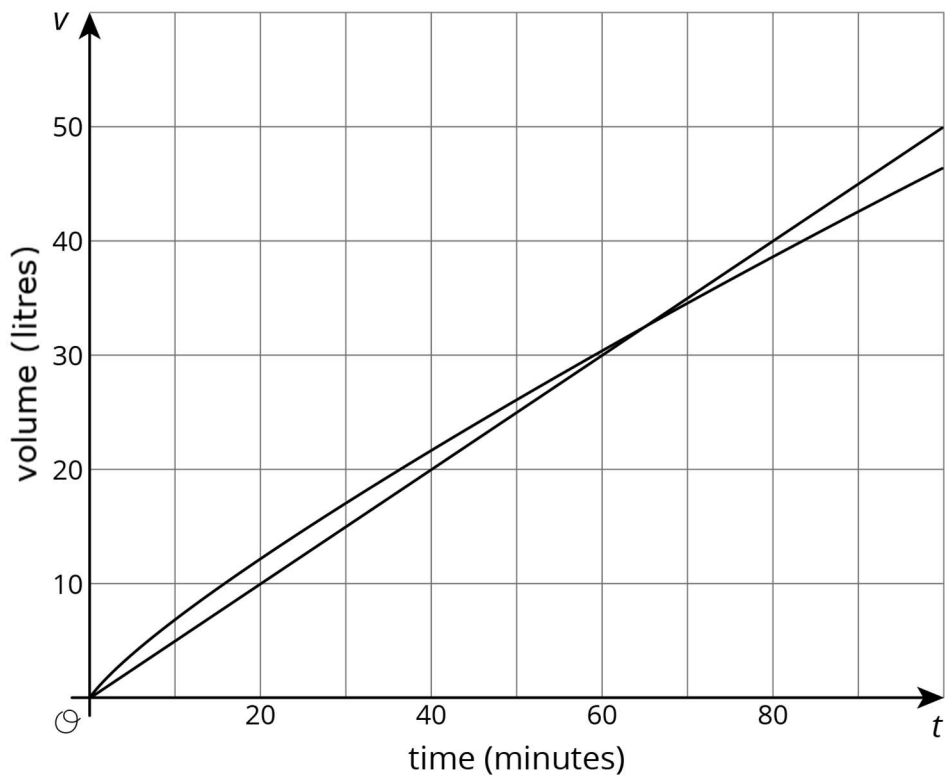
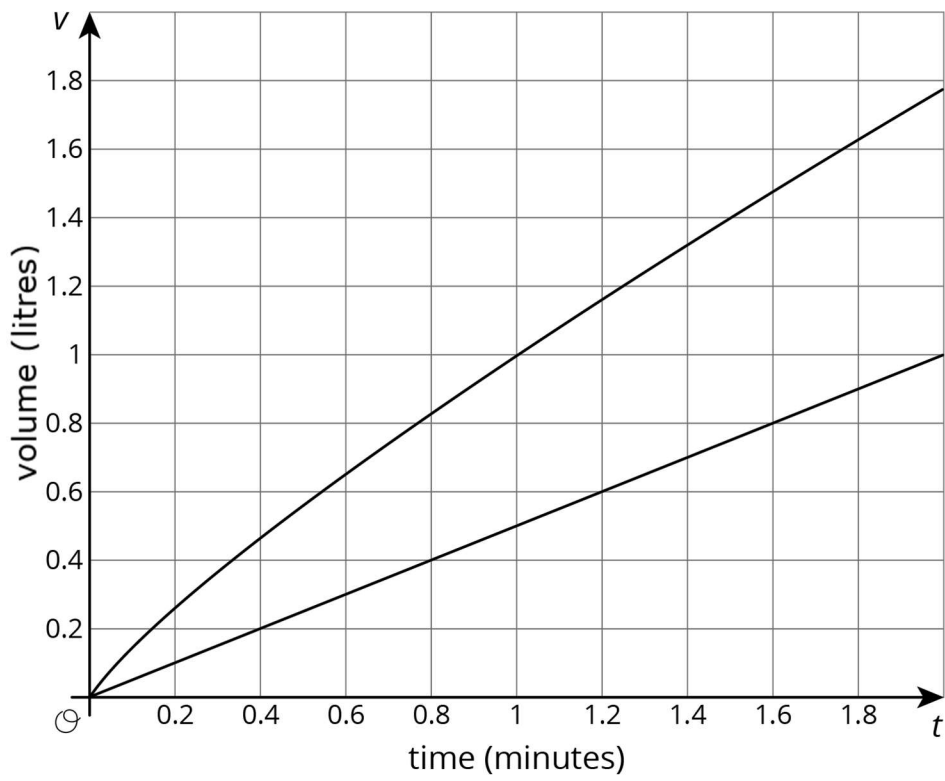




1. Sketch and label a graph of the relationship between the volume of water v and time t for Tank B on each of the axes.
2. Answer the following questions and say which graph you used to find your answer.
 - a. After 30 seconds, which tank has the most water?
 - b. At approximately what times do both tanks have the same amount of water?
 - c. At approximately what times do both tanks contain 1 litre of water? 20 litres?

Student Response

1.



-
- Using the first graph, Tank A has more water after 30 seconds.
 - Using the second graph, at approximately 64 minutes both tanks have the same amount of water.
 - Using the first graph, Tank A has a litre of water after 1 minute. Tank B has a litre of water after 2 minutes. Using the second graph, Tank A has 20 litres of water at around 36 minutes while Tank B has 20 litres of water at 40 minutes.

Are You Ready for More?

A giant tortoise travels at 0.17 miles per hour and an arctic hare travels at 37 miles per hour.

- Draw separate graphs that show the relationship between time elapsed, in hours, and distance travelled, in miles, for both the tortoise and the hare.
- Would it be helpful to try to put both graphs on the same pair of axes? Why or why not?
- The tortoise and the hare start out together and after half an hour the hare stops to take a rest. How long does it take the tortoise to catch up?

Student Response

- Answers vary. Each axes should have “time elapsed (hours)” on the horizontal axis and “distance travelled (miles)” on the vertical axis. The scale for the giant tortoise graph is likely much smaller than the scale for the “arctic hare” graph.
- Answers vary. Sample response: Because the scales on the vertical axis are so different, it is very difficult to put both graphs on the same axes without one of the graphs being squashed up very close to an axis. This makes it difficult to read coordinate values from the graph, so it is not very useful.
- After half an hour the hare has travelled $0.5 \times 37 = 18.5$ miles and the tortoise has traveled $0.5 \times 0.17 = 0.085$ miles, so the hare is $18.5 - 0.085 = 18.415$ miles ahead of the tortoise. Assuming the hare doesn’t move, it will take the tortoise $18.415/0.17 = 108.32$ hours to catch up, or about 4.5 days.

Activity Synthesis

Begin the discussion by asking students:

- “What question can you answer using the second graph that you can’t with the first?” (You can see when the two tanks have the same amount of water on the second graph.)

- “Is the first graph deceptive in any way?” (Yes, it looks like Tank A will always have more volume than Tank B.)
- “Which scale do you prefer?”

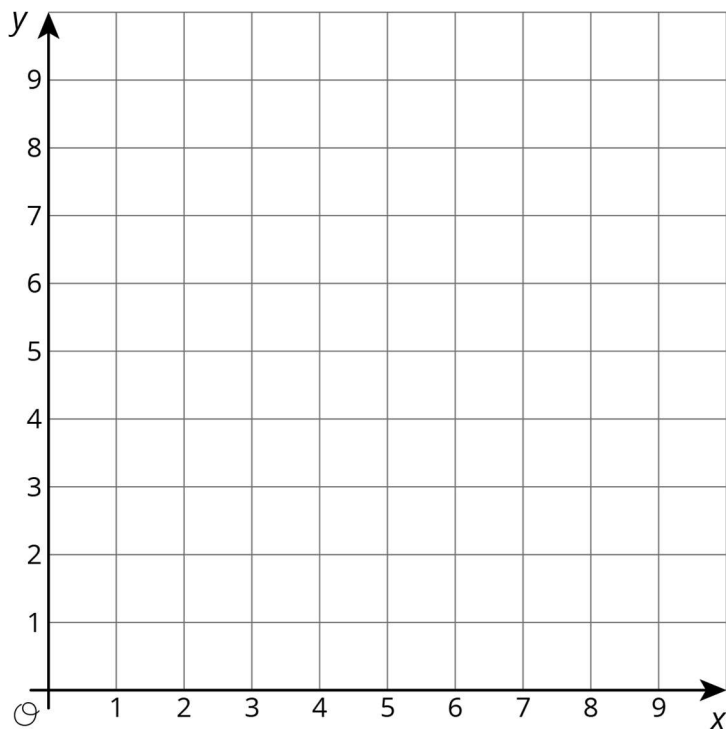
Tell students that if they had a situation where they needed to make a graph from scratch, it is important to check out what questions are asked. Some things to consider are:

- How large are the numbers in the problem? Do you need to go out to 10 or 100?
- What will you count by? 1s? 5s? 10s?
- Should both axes have the same scale?

In the next lesson, students will have to make these types of choices. Tell students that while it can seem like a lot of things to keep in your head, they should always remember that there are many good options when graphing a relationship so they shouldn't feel like they have to make the same exact graph as someone else.

Lesson Synthesis

Display this blank graph for all to see and provide pairs of students with graph paper.



Ask pairs to draw a copy of the axis and give a signal when they have finished. (You may need to warn students to leave room on their graph paper for a second graph as sometimes students like to draw graphs that fill all the space they are given.) Invite a student to

propose a proportional relationship that they consider to have a “steep” line for the class to graph on the axes.

For example, say a student proposes $y = 6x$. After students graph, add the line representing the equation to the graph on display. Then, ask students to make a second graph with the same horizontal scale, but with a vertical scale that makes $y = 6x$ not look as steep when graphed. After students have made the new graph, invite students to share and explain how they decided on their new vertical scale.

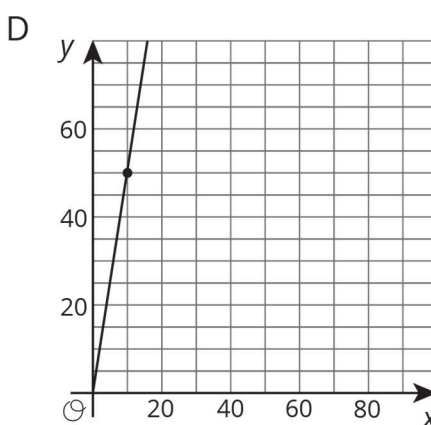
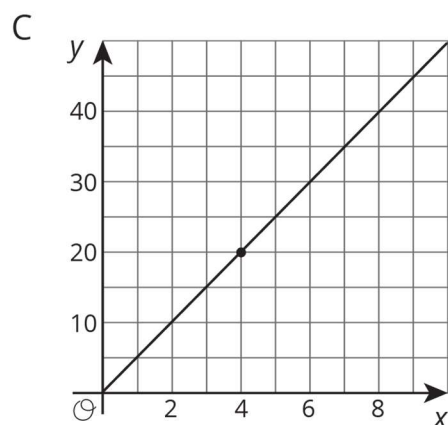
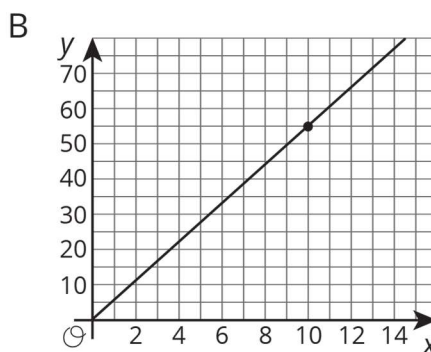
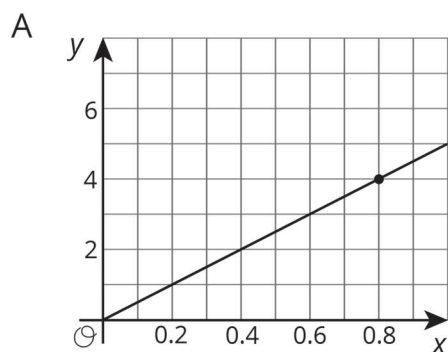
Conclude by reminding students that all these graphs of $y = 6x$ are correct since they all show a proportional relationship with a constant of proportionality equal to 6. Ask students, “Can you think of a reason we might want to graph this relationship with such a large vertical scale?” (If we needed to also graph something like $y = 60x$, we would need a pretty big vertical scale in order to see both lines.)

2.4 Different Axes

Cool Down: 5 minutes

Student Task Statement

Which one of these relationships is different than the other three? Explain how you know.



Student Response

Answers vary. Sample response: Graphs A, C, and D are all representations of $y = 5x$. Graph B is a representation of $y = 5.5x$.

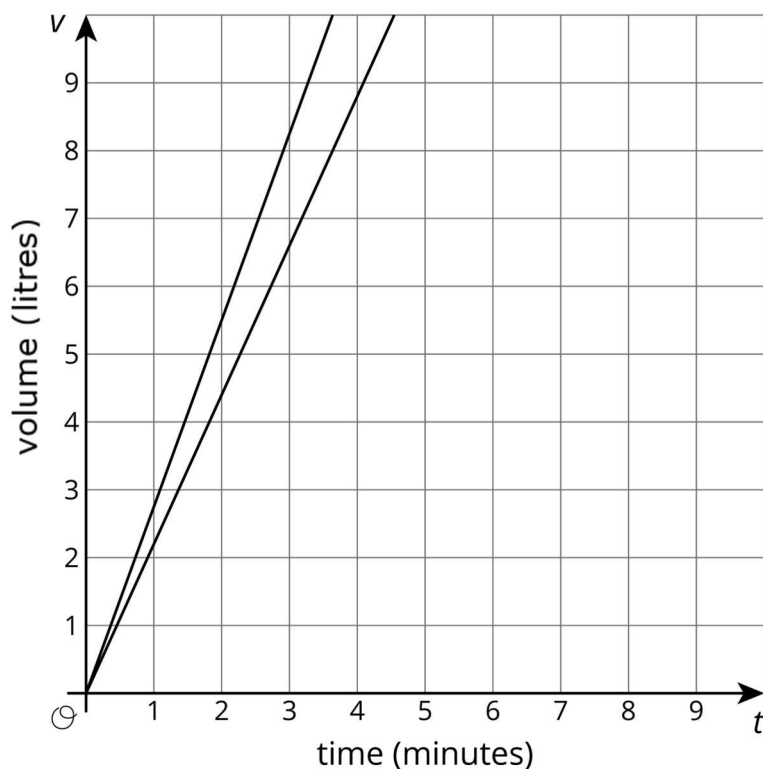
Student Lesson Summary

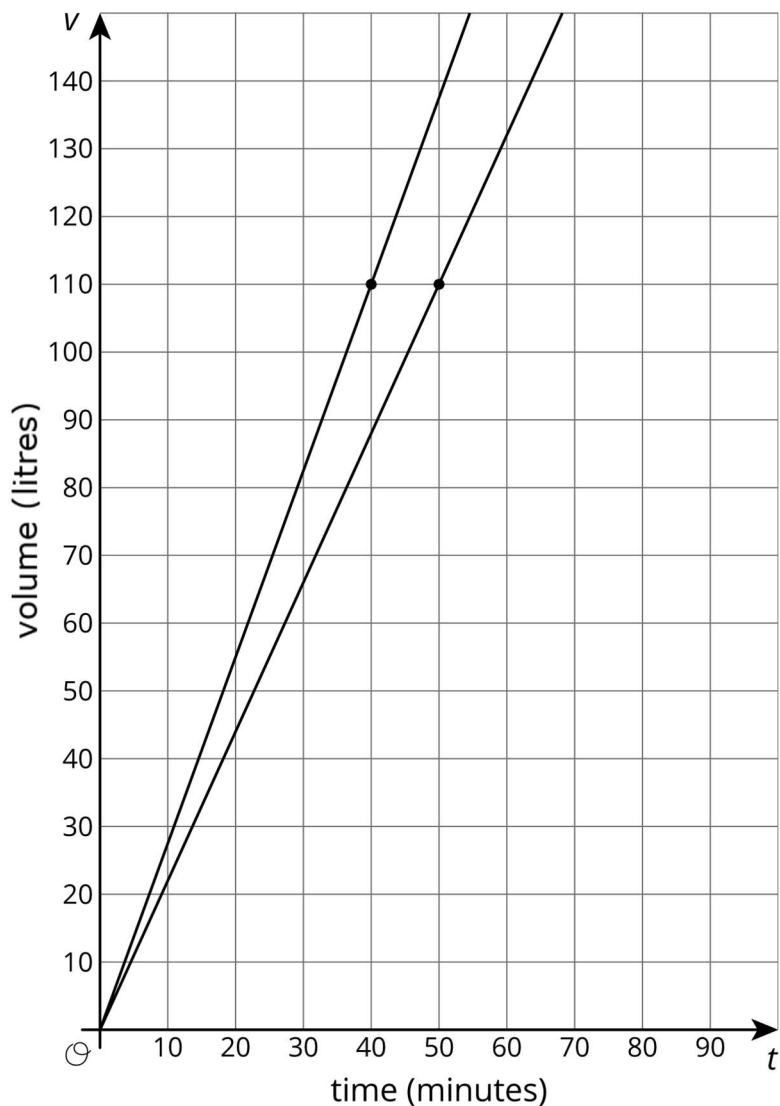
The scales we choose when graphing a relationship often depend on what information we want to know. For example, say two water tanks are filled at different constant rates. The relationship between time in minutes t and volume in litres v of tank A is given by $v = 2.2t$.

For tank B the relationship is $v = 2.75t$

These equations tell us that tank A is being filled at a constant rate of 2.2 litres per minute and tank B is being filled at a constant rate of 2.75 litres per minute.

If we want to use graphs to see at what times the two tanks will have 110 litres of water, then using an axis scale from 0 to 10, as shown here, isn't very helpful.





If we use a vertical scale that goes to 150 litres, a bit beyond the 110 we are looking for, and a horizontal scale that goes to 100 minutes, we get a much more useful set of axes for answering our question.

Now we can see that the two tanks will reach 110 litres 10 minutes apart—tank B after 40 minutes of filling and tank A after 50 minutes of filling.

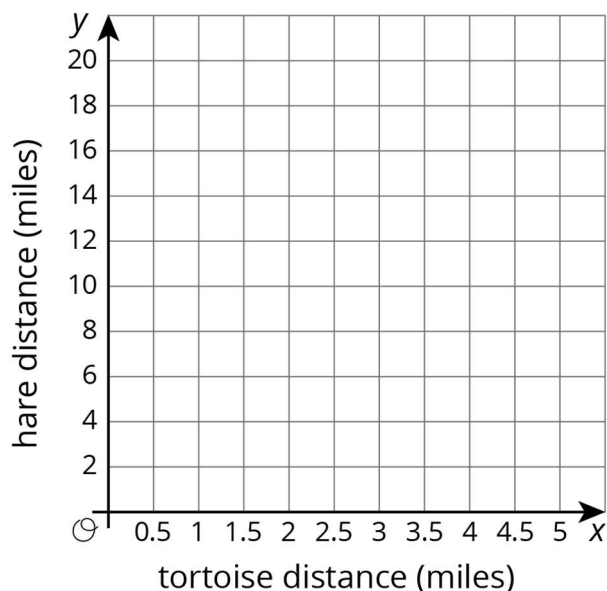
It is important to note that both of these graphs are correct, but one uses a range of values that helps answer the question. In order to always pick a helpful scale, we should consider the situation and the questions asked about it.

Lesson 2 Practice Problems

1. Problem 1 Statement

The tortoise and the hare are having a race. After the hare runs 16 miles the tortoise has only run 4 miles.

The relationship between the distance x the tortoise “runs” in miles for every y miles the hare runs is $y = 4x$. Graph this relationship.



Solution

A ray through $(0,0)$ and $(2,8)$.

2. Problem 2 Statement

The table shows a proportional relationship between the weight on a spring scale and the distance the spring has stretched.

- Complete the table.
- Describe the scales you could use on the x and y axes of a coordinate grid that would show all the distances and weights in the table.

distance (cm)	weight (newtons)
20	28
55	
	140
1	

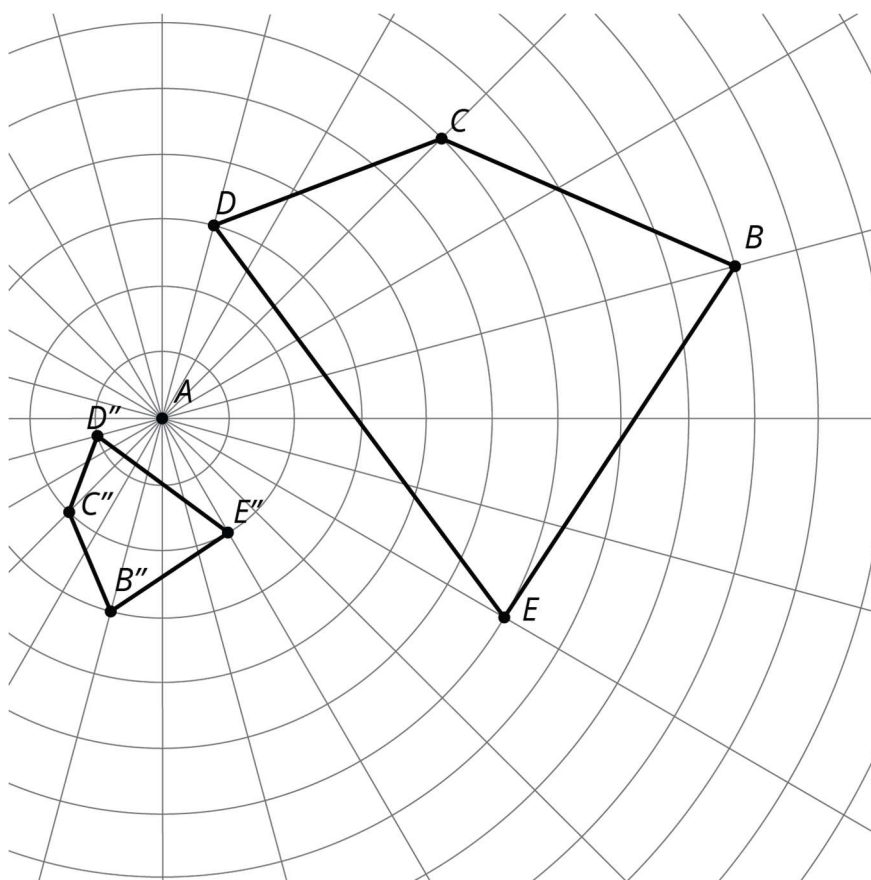
Solution

distance (cm)	weight (newtons)
20	28
55	77
100	140
1	$\frac{7}{5}$

- a. Answers vary. Typical answer: From 0 to 100 on the horizontal (distance) axis and from 0 to 140 on the vertical (weight) axis.

3. Problem 3 Statement

Find a sequence of rotations, reflections, translations, and enlargements showing that one figure is similar to the other. Be specific: give the amount and direction of a translation, a line of reflection, the centre and angle of a rotation, and the centre and scale factor of an enlargement.



Solution

Answers vary. Sample response:

- a. Begin with figure $BCDE$.
- b. Enlarge using A as the centre of enlargement with scale factor $\frac{1}{3}$.
- c. Rotate using A as the centre clockwise 30 degrees.
- d. Reflect along the line that contains A and the image of E under the previous transformations.

4. Problem 4 Statement

Andre said, "I found two figures that are congruent, so they can't be similar."

Diego said, "No, they are similar! The scale factor is 1."

Do you agree with either of them? Use the definition of similarity to explain your answer.

Solution

Diego is correct. Two figures are congruent if one can be moved to the other using a sequence of rigid transformations, and they are similar if one can be moved to the other using a sequence of rigid transformations and enlargements. If two figures are congruent, then they are also similar. Scalings (such as Diego's suggested scaling with a scale factor of 1) can also be applied. While scalings are allowed, they're not always *required* to show that two figures are similar.



© These materials were derived and adapted from Illustrative Mathematics's IM 6–8 Math™. IM 6–8 Math was originally developed by Open Up Resources and authored by Illustrative Mathematics®, and is copyright 2017–2019 by Open Up Resources. It is licensed under the Creative Commons Attribution 4.0 International License (CC BY 4.0) <https://creativecommons.org/licenses/by/4.0/>. OUR's 6–8 Math Curriculum is available at <https://openupresources.org/math-curriculum/>. Adaptations and updates to IM 6–8 Math™ are copyright 2019 by Illustrative Mathematics®, and are licensed under the Creative Commons Attribution 4.0 International License (CC BY 4.0). Further adaptations have been made by MEI.