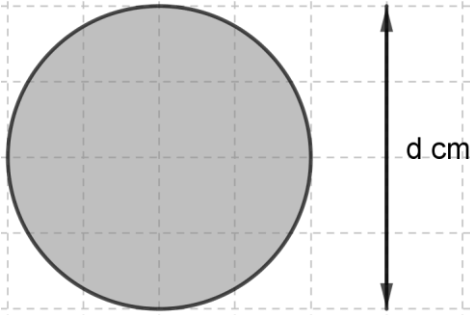

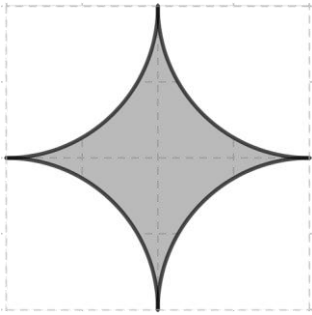
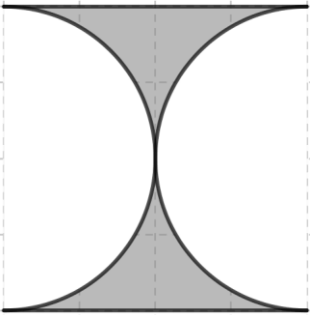
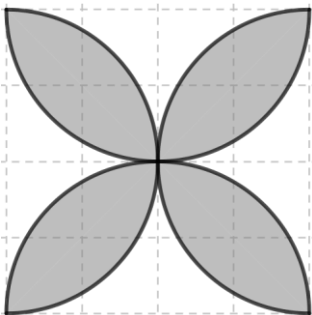
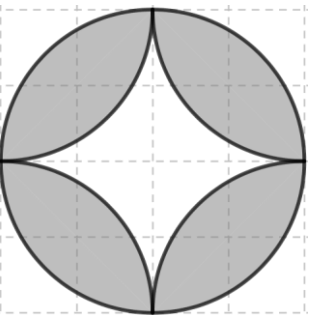
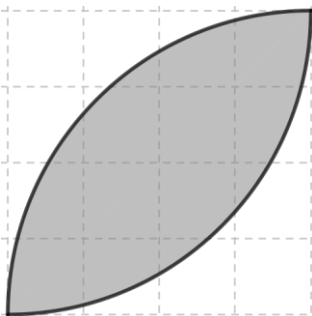
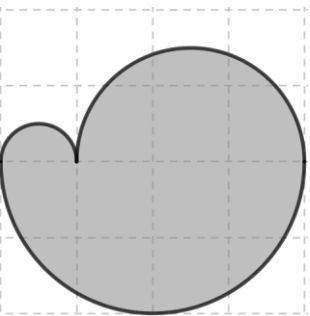


班別：\_\_\_\_\_

姓名：\_\_\_\_\_ ( )

## 周界問題

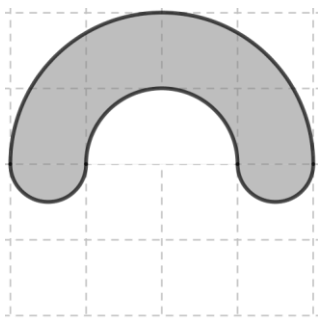
以下的正方形的邊長相等，哪些圖形着色部份的周界相等？

<p>A.</p>  <p>周界= P cm</p>	<p>B.</p>  <p>周界=</p>
<p>C.</p>  <p>周界=</p>	<p>D.</p>  <p>周界=</p>
<p>E.</p>  <p>周界=</p>	<p>F.</p>  <p>周界=</p>
<p>G.</p>  <p>周界=</p>	<p>H.</p>  <p>周界=</p>

班別： \_\_\_\_\_

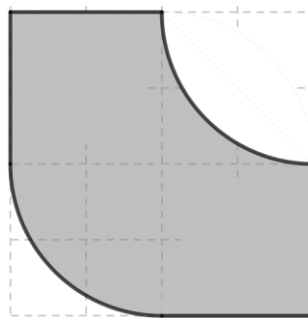
姓名： \_\_\_\_\_ (       )

J.



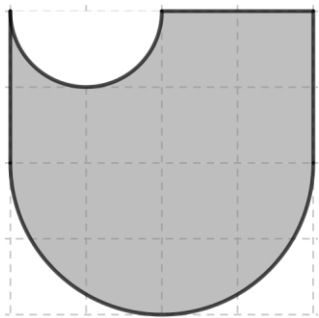
周界=

K.



周界=

L.



周界=

M. 設計你的圖形:



周界=

哪些圖形着色部份的周界相等？