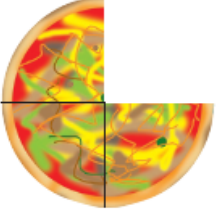

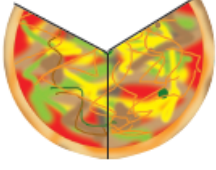
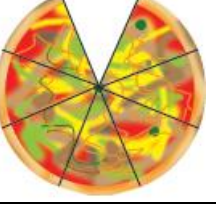

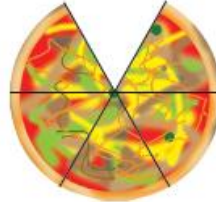


Zadaci za vježbu

Napomena: Svi zadaci trebaju biti precrtani u bilježnicu!

1. Koliki smo dio *pizze* pojeli? Napiši razlomkom i riječima.


	Razlomak	Riječima		Razlomak	Riječima
a. 			d. 		
b. 			e. 		
c. 			f. 		

2. Zapiši riječima i matematičkim simbolima koliki je dio lika obojen.

a.



b.

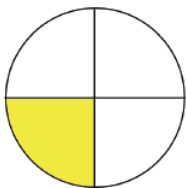


c.

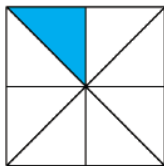


3. Zapiši riječima i matematičkim simbolima koliki je dio lika obojen.

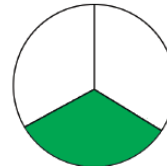
a.



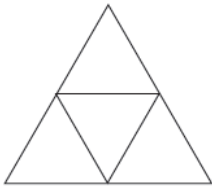
b.



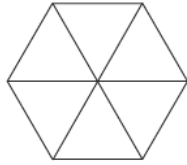
c.




4. Omiljenom bojicom oboji zadani dio lika.



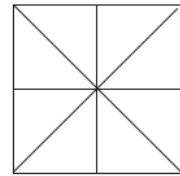
četrtnina




$\frac{1}{6}$



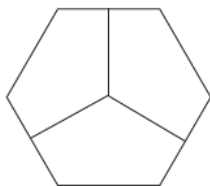
$\frac{3}{4}$



osmina



$\frac{1}{2}$




trećina



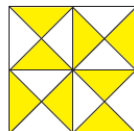
cjelina

5. Zapiši koji dio kvadrata je obojen, a koji neobojen.


a.




b.



c.



d.



6. Iskaži razlomkom koliki dio cjeline predočuje pojedina životinja.

