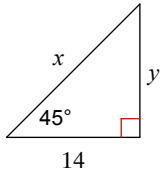


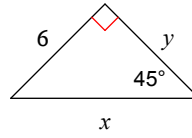
45-45-90 Triangles

Find the missing side lengths. When necessary, write an answer in simplest radical form.

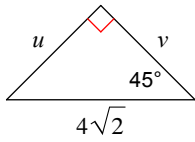
1)



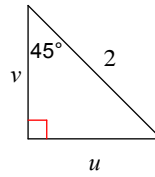
2)



3)



4)



5)

