

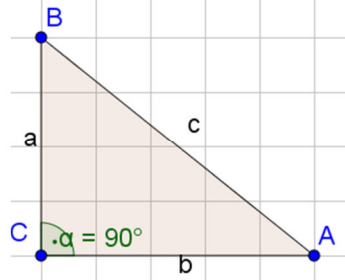
Name: _____

Flächeninhalte ebener Figuren

Rechtwinkeliges Dreieck

Formel: $A =$ _____

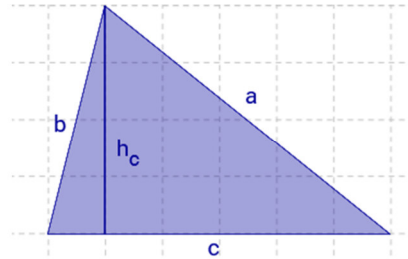
Herleitung:



Allgemeines Dreieck

Formel: $A =$ _____

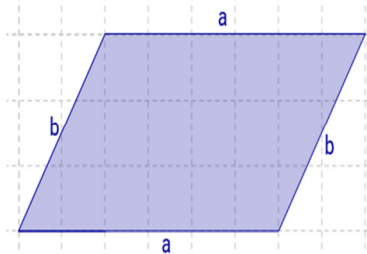
Herleitung:



Parallelogramm

Formel: $A =$ _____

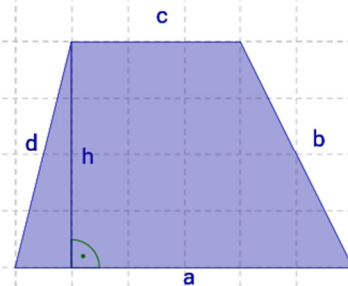
Herleitung:



Trapez

Formel: $A =$ _____

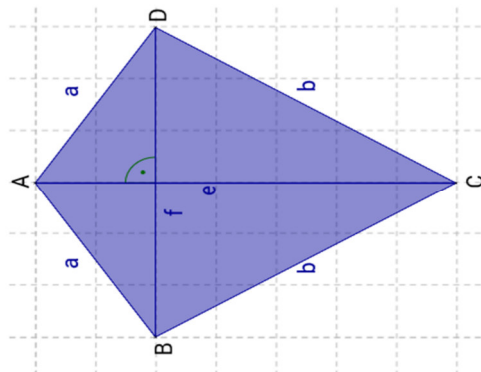
Herleitung:



Deltoid

Formel: $A =$ _____

Herleitung:





Name: _____